

# Naming and Drawing Decimals


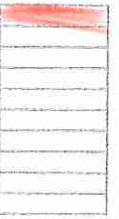






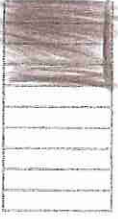

Rebecca

Number



Date: \_\_\_\_\_

1 Complete this table.

Fill in the missing fraction, decimal fraction or shade the model.

Fraction	Decimal fraction	Model	Fraction	Decimal fraction	Model
$\frac{5}{10}$	0.5		$\frac{1}{10}$	0.1	
$\frac{9}{10}$	0.9		$\frac{6}{10}$	0.6	
$\frac{3}{10}$	0.3		$\frac{2}{10}$	0.2	
$\frac{7}{10}$	0.7		$\frac{10}{10}$	1.0	
$\frac{4}{10}$	0.4		$\frac{8}{10}$	0.8	

2 Write the matching fraction and draw a model for these decimal fractions.

Decimal fraction	Fraction	Model
1.3	$1\frac{3}{10}$	
2.5	$2\frac{5}{10}$	

Unit 33 Decimals (TRB pp. 120-122)

VELS/Progression Points  
Number L3/links to PP 3.0

Great, please  
take more  
with your colouring.